

Name: \_\_\_\_\_

# GCSE (1 – 9)

## Probability Trees

### Instructions

- Use **black** ink or ball-point pen.
- Answer all questions.
- Answer the questions in the spaces provided  
– *there may be more space than you need.*
- Diagrams are **NOT** accurately drawn, unless otherwise indicated.
- You must **show all your working out.**

### Information

- The marks for each question are shown in brackets  
– *use this as a guide as to how much time to spend on each question.*

### Advice

- Read each question carefully before you start to answer it.
- Keep an eye on the time.
- Try to answer every question.
- Check your answers if you have time at the end





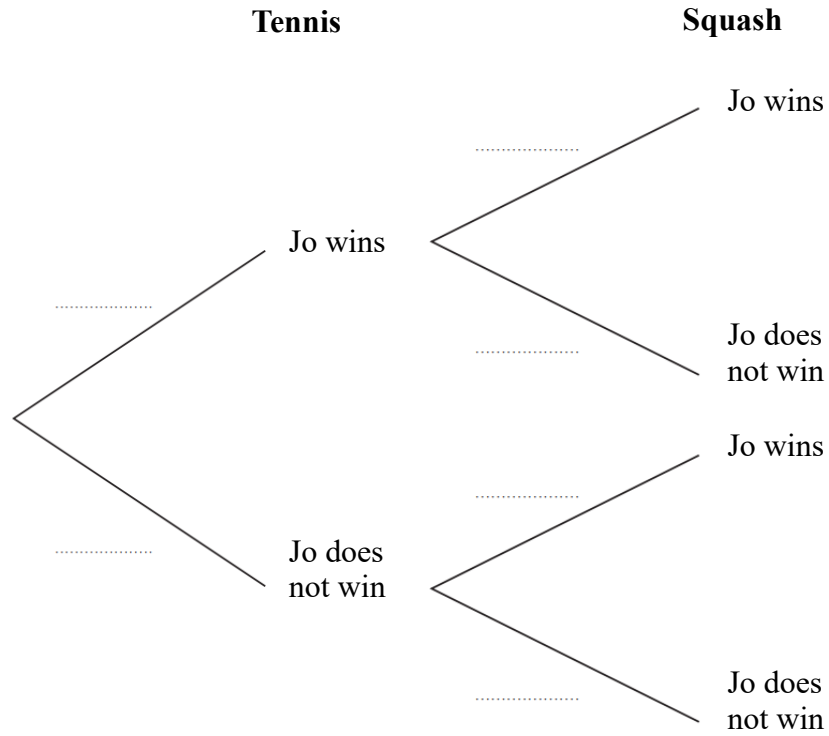


4 Jo is going to play one tennis match and match of squash.

The probability she will win the tennis match is  $\frac{4}{5}$

The probability she will win the squash match is  $\frac{7}{10}$

(a) Complete the probability tree diagram.



(2)

(b) Work out the probability that Jo will win both matches.

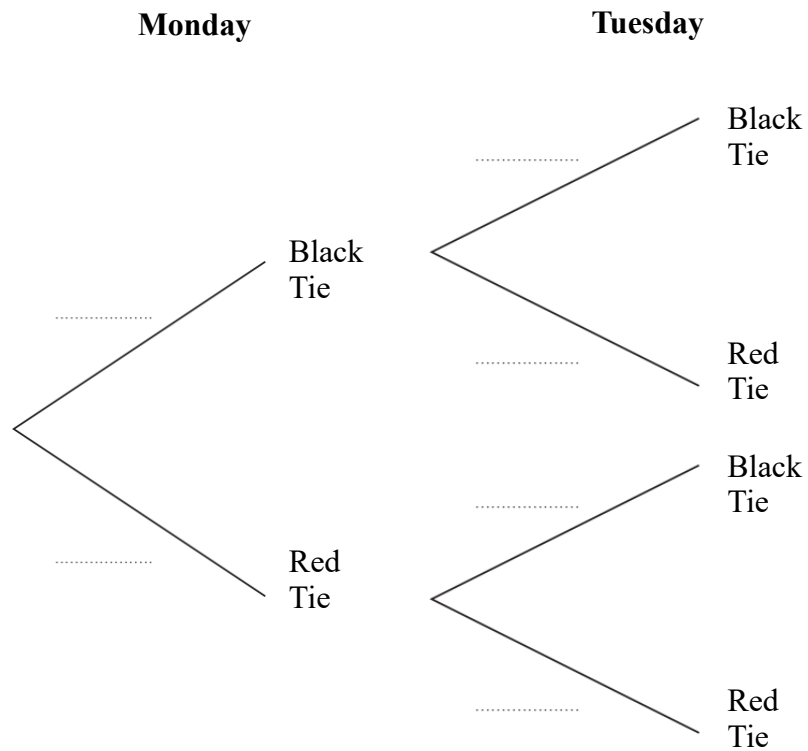
(2)

**(Total for question 4 is 4 marks)**

5 Each day Paul wears either a black tie or a red tie to work.

On any day the probability he wears a black tie is  $\frac{5}{9}$

(a) Complete the probability tree diagram for Monday and Tuesday.



(2)

(b) Work out the probability Paul wears different coloured ties on Monday and Tuesday .

.....  
(2)

**(Total for question 5 is 4 marks)**

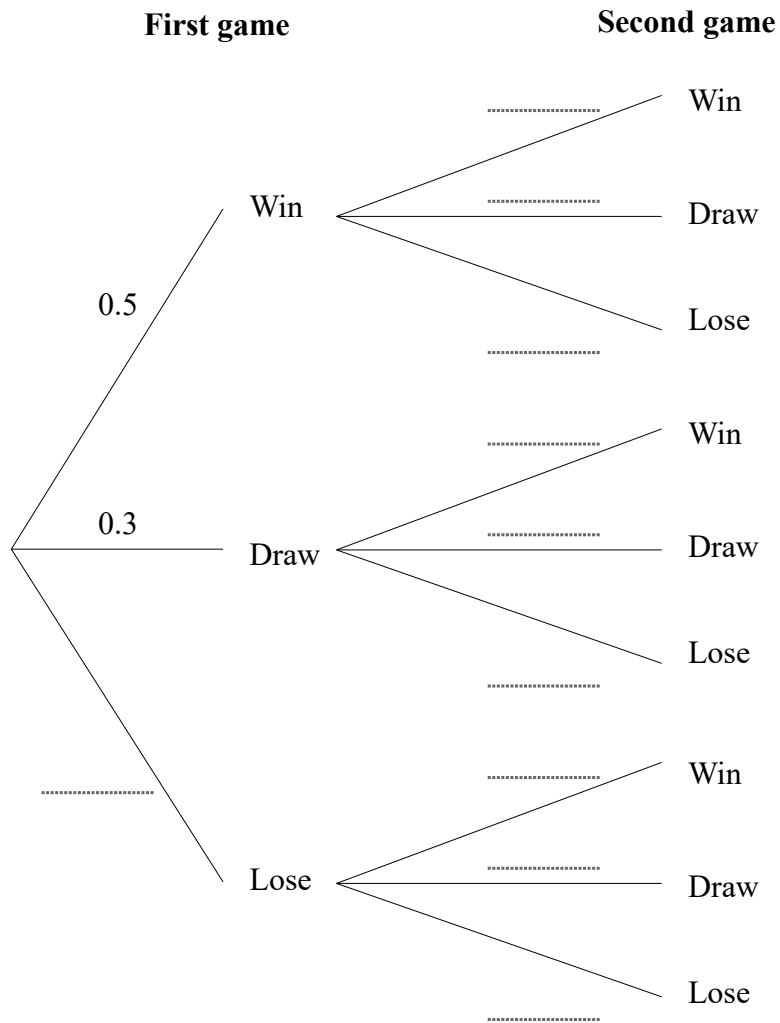
---

6 Jon plays a game where he can win, draw or lose.

The probability Jon wins any game 0.5.  
The probability Jon draws any game is 0.3

Jon plays two games.

(a) Complete the probability tree diagram



(b) Work out the probability Jon wins both games.

(2)

(2)

(Total for question 6 is 4 marks)





**8** Felicity is going to play one game of chess and one game of draughts.

The probability she will win the game of chess is 0.8

The probability she will win the game of draughts is 0.6

Work out the probability that Felicity will win exactly one of these games.

.....  
**(Total for question 8 is 3 marks)**

---

**9** Mimi has two bags.

In the first bag there are 3 red balls and 7 green balls.  
In the second bag there are 4 red balls and 5 green balls.

Mimi takes at random a ball from the first bag.  
She then takes at random a ball from the second bag.

Work out the probability that Mimi takes two green balls.

.....  
**(Total for question 9 is 3 marks)**

---

**10** Lola plays a game where she can win, draw or lose.

The probability Lola wins any game 0.6

The probability Lola draws any game is 0.1

Lola plays two games.

Work out the probability Lola wins exactly one game.

.....  
**(Total for question 10 is 3 marks)**

---