

Name: \_\_\_\_\_

# GCSE (1 – 9)

## Inequalities

### Instructions

- Use **black** ink or ball-point pen.
- Answer all Questions.
- Answer the Questions in the spaces provided  
– *there may be more space than you need.*
- Diagrams are **NOT** accurately drawn, unless otherwise indicated.
- You must **show all your working out.**

### Information

- The marks for each Question are shown in brackets  
– *use this as a guide as to how much time to spend on each Question.*

### Advice

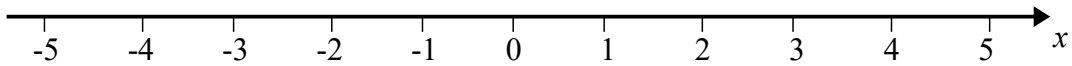
- Read each Question carefully before you start to answer it.
- Keep an eye on the time.
- Try to answer every Question.
- Check your answers if you have time at the end

- 1  $n$  is an integer such that  $-2 \leq n < 3$   
Write down all the possible values of  $n$ .

.....  
**(Total for question 1 is 2 marks)**

---

- 2 (a) On the number line, show the inequality  $x > -3$



(2)

$1 \leq y < 5$  where  $y$  is an integer.

- (b) Write down all the possible values of  $y$ .

.....  
(2)

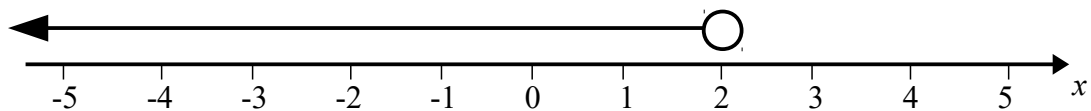
- (c) Solve  $4t + 7 \leq 19$

.....  
(2)

**(Total for question 2 is 6 marks)**

---

- 3 Write down the inequality shown on the number line.



.....  
**(Total for question 3 is 2 marks)**

---

4 (a)  $-1 < n \leq 3$  where  $n$  is an integer.

(b) Write down all the possible values of  $n$ .

.....  
(2)

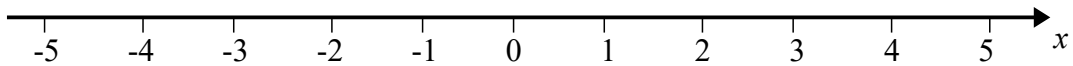
(c) Solve  $2x - 5 > 8$

.....  
(2)

**(Total for question 4 is 4 marks)**

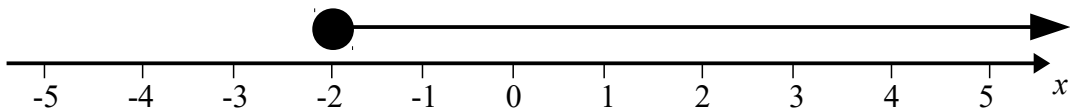
---

5 (a) On the number line, show the inequality  $-2 < x < 4$



(2)

(b) Write down the inequality shown on the number line.

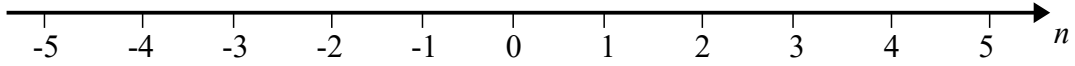


.....  
(2)

**(Total for question 5 is 4 marks)**

---

- 6 (a) On the number line, show the inequality  $n < 2$ .



(2)

$4 \leq y < 8$  where  $y$  is an integer.

- (b) Write down all the possible values of  $y$ .

.....

(2)

- (c) Solve  $4x + 6 \leq x + 21$

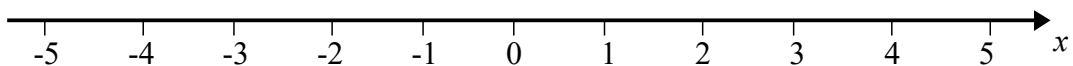
.....

(3)

**(Total for question 6 is 7 marks)**

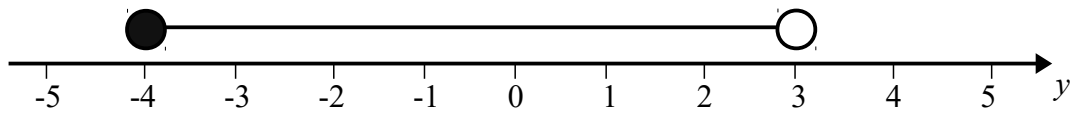
- 7 Solve  $4x \leq x + 6$

Show your answer on the number line.



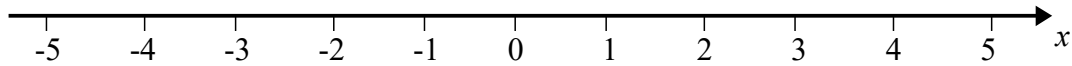
**(Total for question 7 is 3 marks)**

8 Write down the inequality shown on the number line.



.....  
**(Total for question 8 is 2 marks)**

9 (a) On the number line, show the inequality  $x + 1 \leq 4$



(2)

$5 < 2y < 12$  where  $y$  is an integer.

(b) Write down all the possible values of  $y$ .

.....  
(2)

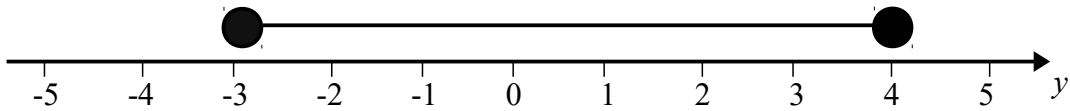
(c) Solve  $4 > 19 - 3x$

.....  
(2)  
**(Total for question 9 is 6 marks)**

10  $n$  is an integer such that  $-8 < 3n < 10$   
Write down all the possible values of  $n$ .

.....  
**(Total for question 10 is 2 marks)**

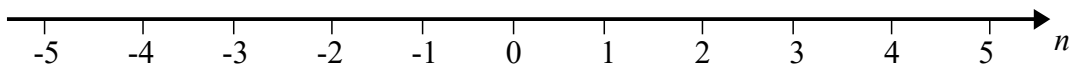
11 Write down the inequality shown on the number line.



.....

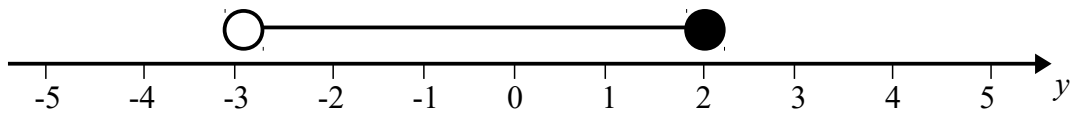
**(Total for question 11 is 2 marks)**

12 (a) On the number line, show the inequality  $-4 < n \leq 5$



(2)

(b) Write down the inequality shown on the number line.



.....

(2)

**(Total for question 12 is 4 marks)**

13 Solve  $2(3n - 5) > 12$

.....

**(Total for question 13 is 2 marks)**

- 14**  $n$  is an integer such that  $-3 < 2n < 6$   
Write down all the possible values of  $n$ .

.....

**(Total for question 14 is 2 marks)**

---

- 15** Solve  $3(n + 1) < 24$

.....

**(Total for question 15 is 2 marks)**

---

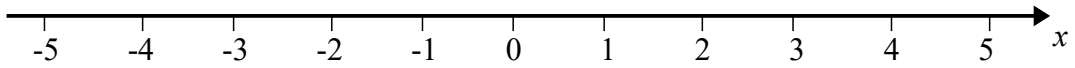
- 16** Solve  $4(2x + 1) > 9$

.....

**(Total for question 16 is 2 marks)**

---

17 (a) On the number line, show the inequality  $-3 \leq x + 2 < 2$



(3)

$1 \leq 2y - 3 < 9$  where  $y$  is an integer.

(b) Write down all the possible values of  $y$ .

(c) Solve  $4x - 4 \leq 7x - 19$

.....  
(3)

.....  
(3)

**(Total for question 17 is 9 marks)**