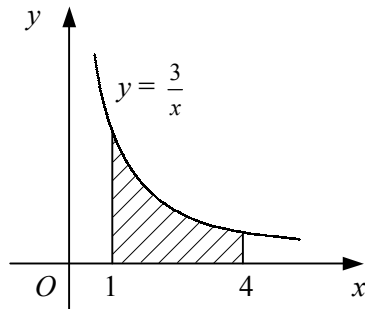


1



The diagram shows the curve with equation $y = \frac{3}{x}$, $x > 0$.

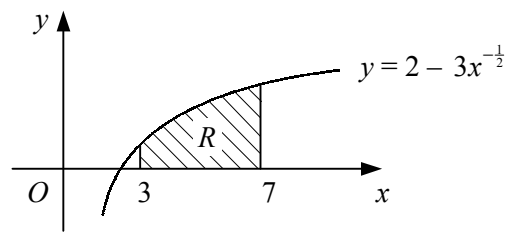
- a Copy and complete the table below, giving the exact y -coordinate corresponding to each x -coordinate for points on the curve.

x	1	2	3	4
y				

The shaded region is bounded by the curve, the x -axis and the lines $x = 1$ and $x = 4$.

- b Use the trapezium rule with all the values in your table to show that the area of the shaded region is approximately $4\frac{3}{8}$.
- c With the aid of a sketch diagram, explain whether the true area is more or less than $4\frac{3}{8}$.
- 2 a Sketch the curve $y = x(3x + 2)$ showing the coordinates of any points of intersection with the coordinate axes.
- b Use the trapezium rule with 4 intervals of equal width to estimate the area bounded by the curve, the x -axis and the line $x = 2$.
- c Find this area exactly using integration.
- d Hence, find the percentage error in the estimate made in part b.
- 3 Use the trapezium rule with the stated number of intervals of equal width to estimate the area of the region enclosed by the given curve, the x -axis and the given ordinates.
- a $y = \frac{3}{2x+1}$ $x = 4$ $x = 6$ 2 intervals
- b $y = \lg(x^2 + 9)$ $x = 0$ $x = 3$ 3 intervals
- c $y = x^2 \sin x$ $x = 0$ $x = \pi$ 4 intervals
- d $y = \sqrt[3]{2x+5}$ $x = -2$ $x = 2$ 4 intervals
- 4 Use the trapezium rule with the stated number of equally-spaced ordinates to estimate the area of the region enclosed by the given curve, the x -axis and the given ordinates.
- a $y = 3^x$ $x = 0$ $x = 3$ 4 ordinates
- b $y = \sin(\lg x)$ $x = 2$ $x = 2.4$ 3 ordinates
- c $y = \frac{x}{x^3+2}$ $x = 0$ $x = 0.5$ 6 ordinates
- d $y = \sqrt{\cos(\frac{1}{2}x)}$ $x = 0$ $x = \frac{2\pi}{3}$ 5 ordinates

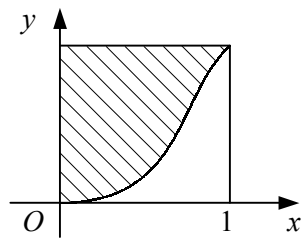
5



The diagram shows the finite region, R , which is bounded by the curve $y = 2 - 3x^{-\frac{1}{2}}$, the x -axis and the lines $x = 3$ and $x = 7$.

- Use the trapezium rule with 5 intervals of equal width to estimate the area of R .
- Use integration to find the exact area of R .

6



The diagram shows the curve $y = \sin x^2$, $0 \leq x \leq 1$ and the lines $x = 1$ and $y = \sin 1$.

- Use the trapezium rule with 5 strips of equal width to estimate the area bounded by the curve $y = \sin x^2$, the x -axis and the line $x = 1$, giving your answer to 4 decimal places.

The shaded region on the diagram is bounded by the curve, the y -axis and the line $y = \sin 1$. A flower bed is modelled by the shaded region, with the units on the axes in metres.

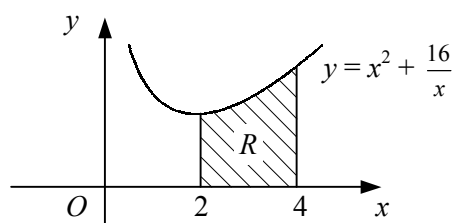
- Calculate an estimate for the area of the flower bed, correct to 2 significant figures.

- Use the binomial theorem to expand $(1 + \frac{x}{2})^6$ in ascending powers of x up to and including the term in x^3 .

The finite region R is bounded by the curve $y = (1 + \frac{x}{2})^6$, the coordinate axes and the line $x = 0.5$

- Use your expression in **a** and integration to find an estimate for the area of R .
- Use the trapezium rule with 6 equally-spaced ordinates to find another estimate for the area of R .

8



The diagram shows the curve $y = x^2 + \frac{16}{x}$ for $x > 0$.

- Show that the stationary point on the curve has coordinates $(2, 12)$.

The region R is bounded by the curve $y = x^2 + \frac{16}{x}$, the x -axis and the lines $x = 2$ and $x = 4$.

- Use the trapezium rule with 4 strips of equal width to estimate the area of R .
- State whether your answer to **b** is an under-estimate or an over-estimate of the area of R .